




Write each array as an addition problem and solve.



Answers

Ex. 3+3=6

1. _____

2. _____

3. _____

4. _____

5. _____

6. _____

7. _____

8. _____

9. _____


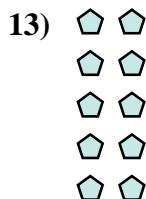

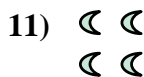



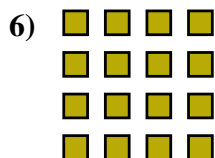
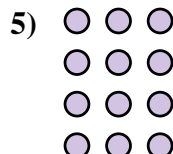

10. _____

11. _____

12. _____


13. _____

14. _____



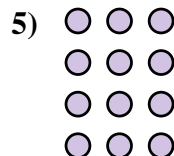


Write each array as an addition problem and solve.


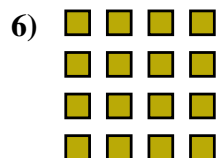


Answers

Ex. 3+3=6



1. 5+5+5=15



2. 3+3+3=9

3. 2+2+2=6

4. 5+5=10

5. 3+3+3+3=12

6. 4+4+4+4=16

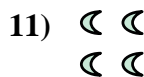


7. 3+3+3+3+3=15

8. 4+4+4=12

9. 5+5+5+5+5=25

10. 5+5+5+5=20

11. 2+2=4



12. 2+2+2+2=8

13. 2+2+2+2+2=10

14. 4+4=8

